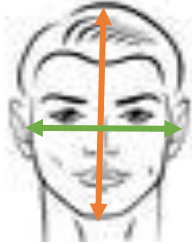


Are you a golden person?

Choose one person in your group to measure. Use rulers and tape measures but be as accurate as possible.

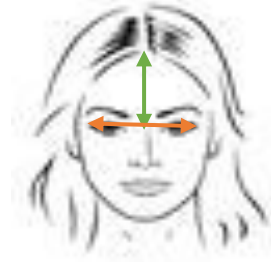
A Length of your face = _____



B Width of your face = _____

A ÷ **B** = _____

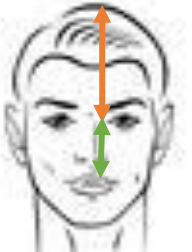
C Distance of eyes = _____
(From the outsides)



D Hairline to middle
of your eyes = _____

C ÷ **D** = _____

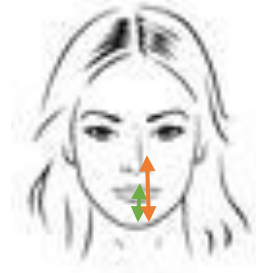
E Top of head to
middle of eyes = _____



F Middle of eye to
middle of lips = _____

E ÷ **F** = _____

G Tip of your nose to
your chin = _____

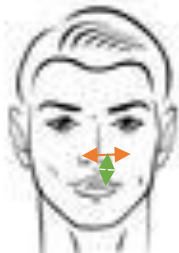


H Middle of your lips
to your chin = _____

G ÷ **H** = _____

I

Width of your nose
at the widest part = _____



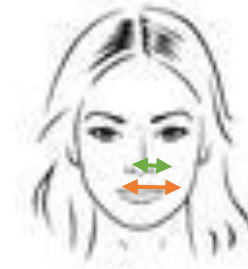
J

Tip of your nose to
the middle of your lips = _____

$I \div J =$ _____

K

Width of your lips = _____
(From the outsides)



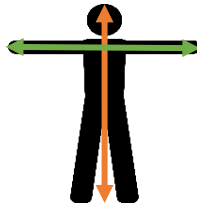
L

Width of your nose
at the widest part = _____

$K \div L =$ _____

M

Your height = _____



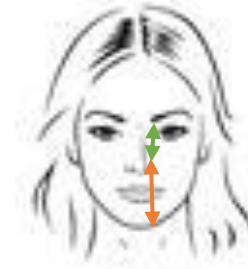
N

Arm Span = _____

$M \div N =$ _____

O

Tip of your nose to
to your chin = _____



P

Middle of eye to
your nose tip = _____

$O \div P =$ _____

What do you notice about your calculations?